



8) Identify following figures (as traditional of method of irrigation)
 Rahat, Chain pump, Moat, Dhekli



9) Complete following table.

Food	Source		
Milk
Meat
Eggs

10) Match the column A to Column B.

Column A

Column B

a)




i) Hoe

b)



ii) Cultivator

c)



iii) Plough

d)



iv) Seed drill

Ans.

A	
B	
C	
D	